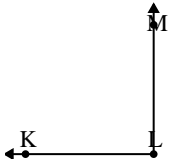




Solve each problem.

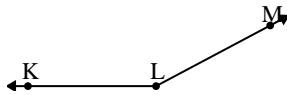
1)



Which choice best represents  $\angle KLM$ ?

- A.  $13^\circ$
- B.  $147^\circ$
- C.  $90^\circ$
- D.  $42^\circ$

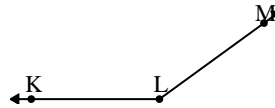
2)



Which choice best represents  $\angle KLM$ ?

- A.  $129^\circ$
- B.  $11^\circ$
- C.  $178^\circ$
- D.  $152^\circ$

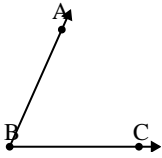
3)



Which choice best represents  $\angle KLM$ ?

- A.  $49^\circ$
- B.  $91^\circ$
- C.  $1^\circ$
- D.  $144^\circ$

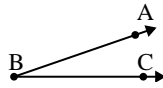
4)



Which choice best represents  $\angle ABC$ ?

- A.  $30^\circ$
- B.  $66^\circ$
- C.  $97^\circ$
- D.  $127^\circ$

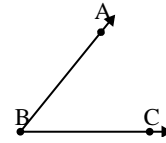
5)



Which choice best represents  $\angle ABC$ ?

- A.  $79^\circ$
- B.  $117^\circ$
- C.  $19^\circ$
- D.  $53^\circ$

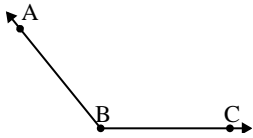
6)



Which choice best represents  $\angle ABC$ ?

- A.  $9^\circ$
- B.  $160^\circ$
- C.  $51^\circ$
- D.  $133^\circ$

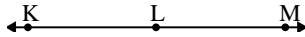
7)



Which choice best represents  $\angle ABC$ ?

- A.  $178^\circ$
- B.  $154^\circ$
- C.  $129^\circ$
- D.  $5^\circ$

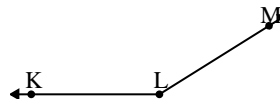
8)



Which choice best represents  $\angle KLM$ ?

- A.  $6^\circ$
- B.  $180^\circ$
- C.  $59^\circ$
- D.  $123^\circ$

9)



Which choice best represents  $\angle KLM$ ?

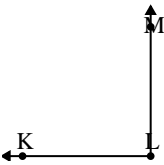
- A.  $124^\circ$
- B.  $64^\circ$
- C.  $148^\circ$
- D.  $28^\circ$

Answers

1. \_\_\_\_\_
2. \_\_\_\_\_
3. \_\_\_\_\_
4. \_\_\_\_\_
5. \_\_\_\_\_
6. \_\_\_\_\_
7. \_\_\_\_\_
8. \_\_\_\_\_
9. \_\_\_\_\_

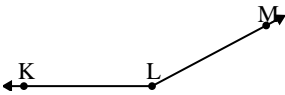


Solve each problem.

1) 

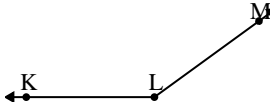
Which choice best represents  $\angle KLM$ ?

A.  $13^\circ$   
 B.  $147^\circ$   
 C.  $90^\circ$   
 D.  $42^\circ$

2) 

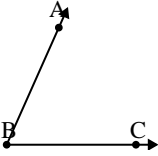
Which choice best represents  $\angle KLM$ ?

A.  $129^\circ$   
 B.  $11^\circ$   
 C.  $178^\circ$   
 D.  $152^\circ$

3) 

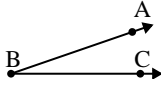
Which choice best represents  $\angle KLM$ ?

A.  $49^\circ$   
 B.  $91^\circ$   
 C.  $1^\circ$   
 D.  $144^\circ$

4) 

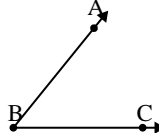
Which choice best represents  $\angle ABC$ ?

A.  $30^\circ$   
 B.  $66^\circ$   
 C.  $97^\circ$   
 D.  $127^\circ$

5) 

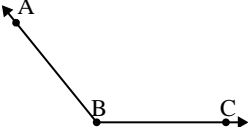
Which choice best represents  $\angle ABC$ ?

A.  $79^\circ$   
 B.  $117^\circ$   
 C.  $19^\circ$   
 D.  $53^\circ$

6) 

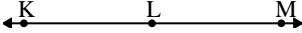
Which choice best represents  $\angle ABC$ ?

A.  $9^\circ$   
 B.  $160^\circ$   
 C.  $51^\circ$   
 D.  $133^\circ$

7) 

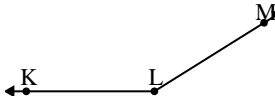
Which choice best represents  $\angle ABC$ ?

A.  $178^\circ$   
 B.  $154^\circ$   
 C.  $129^\circ$   
 D.  $5^\circ$

8) 

Which choice best represents  $\angle KLM$ ?

A.  $6^\circ$   
 B.  $180^\circ$   
 C.  $59^\circ$   
 D.  $123^\circ$

9) 

Which choice best represents  $\angle KLM$ ?

A.  $124^\circ$   
 B.  $64^\circ$   
 C.  $148^\circ$   
 D.  $28^\circ$

Answers

1.     **C**
2.     **D**
3.     **D**
4.     **B**
5.     **C**
6.     **C**
7.     **C**
8.     **B**
9.     **C**